

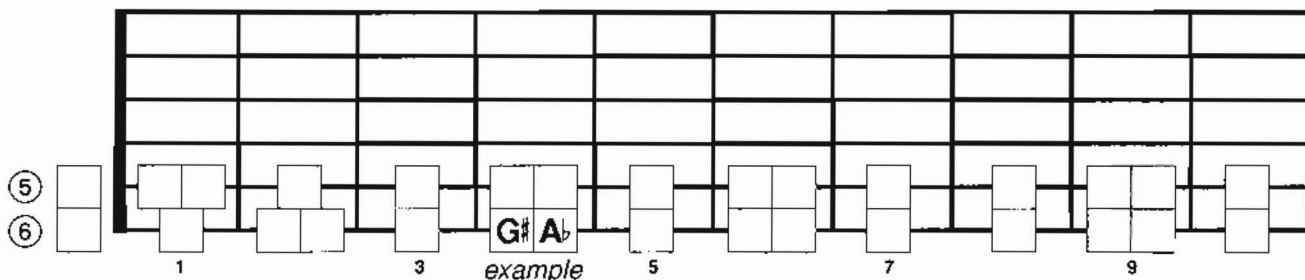
WORKSHEET #10

Name _____ Date _____

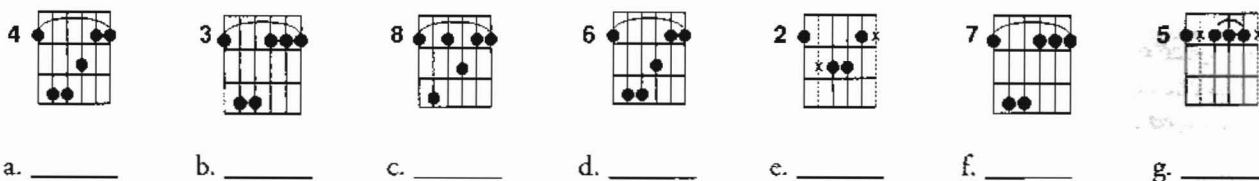
MOVEABLE 6th & 5th STRING ROOT CHORDS, CHORD CONSTRUCTION

(Student Book pages 8-9, 47-51, 86-89)

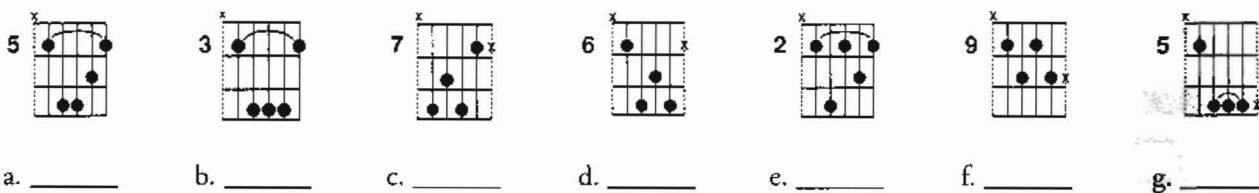
1. On the fingerboard, write in the names of all the notes on the 5th and 6th strings. Include the flats and sharps.



2. Name the following 6th string root chords.



3. Name the following 5th string root chords.



4. Each type of chord has a formula. For example, a G major triad is R 3 5.
Write the formulas for each of the following chords.

- a. Cm _____ b. A _____ c. C7 _____
 d. Dmaj7 _____ e. Gm7 _____ f. A aug _____
 g. Dm7b5 _____ h. G7 _____ i. G dim _____

5. Name the four types of triads. _____

6. Name the five types of basic seventh chords.

7. What is the name of the note located on the:
 a. 6th string, fifth fret _____ b. 5th string, third fret _____ c. 6th string, seventh fret _____
 d. 6th string, first fret _____ e. 5th string, fourth fret _____ f. 6th string, sixth fret _____